



Exam Board	Recommended revision guide	Support available in school
<b>AQA</b>		<b>After school revision sessions every Friday in A102.</b>



# Geography

## Revision Schedule 2024









Useful online resources	Exam date(s)
<p><b>BBC Bitesize:</b>  <a href="https://www.bbc.co.uk/bitesize/examspecs/zy3ptyc">https://www.bbc.co.uk/bitesize/examspecs/zy3ptyc</a></p> <p><b>Seneca Learning:</b>  <a href="https://senecalearning.com/en-GB/">https://senecalearning.com/en-GB/</a> - make sure to select the AQA GCSE Geography course.</p> <p><b>Past paper questions:</b>  <a href="https://www.aqa.org.uk/subjects/geography/gcse/geography-8035/assessment-resources">https://www.aqa.org.uk/subjects/geography/gcse/geography-8035/assessment-resources</a></p> <p><b>Tutor2U Revision Blast Videos:</b>  <a href="https://www.youtube.com/playlist?list=PLp8BSCLLWBUAIPsWgY9LpB5gspnApW1gR">https://www.youtube.com/playlist?list=PLp8BSCLLWBUAIPsWgY9LpB5gspnApW1gR</a></p>	<p><b>Paper 1</b>  Friday 17<sup>th</sup> May.</p> <p><b>Paper 2</b>  Wednesday 5<sup>th</sup> June.</p> <p><b>Paper 3</b>  Friday 14<sup>th</sup> June.</p>

# The Final Countdown – GCSE Geography

www.internetgeography.net/tfc







Paper 1 – 17/05/24 | Paper 2 – 05/06/24 | Paper 3 – 14/06/24

Week	Visit	Revise	Quiz	Exam Question(s)
1 03/01/24		Ecosystems TRF		
2 08/01/24		Hot Deserts <b>OR</b> Cold Environments	Ecosystems TRF	<ol style="list-style-type: none"> <li>Using Figure 1 and your own knowledge explain how plants have adapted to the physical conditions of the tropical rainforest. (6)</li> <li>Some economic activities in tropical rainforests have major environmental impacts. To what extent do you agree? Use Figure 2 and a case study to explain your answer. (9)</li> </ol>
3 15/01/24		Hazards Tectonic Hazards	Hot Deserts <b>OR</b> Cold Environments	<ol style="list-style-type: none"> <li>Using Figure 3 and your own knowledge explain how animals have adapted to survive in a hostile environment you have studied. (6)</li> <li>Using a case study, to what extent have opportunities for economic activity been developed in your chosen environment? (9)</li> </ol>
4 22/01/24		Weather Hazards Climate Change	Hazards Tectonic Hazards	<ol style="list-style-type: none"> <li>Using Figure 4 and your own understanding, suggest how plate movements causes tectonic hazards along destructive plate margins (6)</li> <li>Immediate responses to a tectonic hazard are more important than long-term responses. Do you agree? Using Figure 5 and one or more examples, explain your answer. (9 +3).</li> </ol>
5 29/01/24		River Landscapes in the UK	Weather Hazards Climate Change	<ol style="list-style-type: none"> <li>Explain how burning fossil fuels and deforestation may have contributed to global changes in temperature. (4)</li> <li>Suggest how extreme weather in the UK can have economic and social impacts. Use Figure 6 and your own understanding. (6)</li> <li>Managing climate involves both mitigation and adaptation. Do you agree? Explain your answer. Use Figure 7 and your understanding. (9 +3)</li> <li>Assess the extent to which tropical storms have effects on people and the environment. Use Figure 8 and an example you have studied. (9 +3).</li> </ol>
6 05/02/24		Coastal Landscapes in the UK	River Landscapes in the UK	<ol style="list-style-type: none"> <li>Explain how oxbow lakes are formed. (4)</li> <li>Explain how hard engineering strategies can help reduce the impact of river flooding. Use Figure 9 and your own understanding. (4)</li> <li>Explain how physical and human factors may affect flood risk. Use Figure 10 and your own understanding. (6)</li> </ol>

# The Final Countdown – GCSE Geography

www.internetgeography.net/tfc







Paper 1 – 17/05/24 | Paper 2 – 05/06/24 | Paper 3 – 14/06/24

Week	Visit	Revise	Quiz	Exam Question(s)
<b>7</b> 20/02/24		Urban Issues and Challenges – LIC/NEE	Coastal Landscapes in the UK	<ol style="list-style-type: none"> <li>1. Explain how the sea defences shown in Figure 11 help to protect the coastline from erosion. [4 marks]</li> <li>2. Explain how different coastal landforms are created by erosion. Use Figure 12 and your own understanding. [6 marks]</li> <li>3. Discuss the costs and benefits of hard engineering strategies in protecting coastlines. Use Figure 13 and Figure 14 and your own understanding. [6 marks]</li> </ol>
<b>8</b> 26/02/24		Urban Issues and Challenges – City in a HIC	Urban Issues and Challenges – LIC/NEE	<ol style="list-style-type: none"> <li>1. Suggest why sanitation systems in cities in LICs/NEEs create challenges. Use Figure 15 and your own understanding. [4 marks]</li> <li>2. Use Figure 16 and a case study of a city in a LIC or NEE to suggest why managing traffic congestion and air pollution may be challenging. [6 marks]</li> <li>3. Assess the extent of the challenges created by urban growth in LICs/NEEs. Use a case study of a city in an LIC/NEE. [9 marks] [+ 3 SPaG marks]</li> </ol>
<b>9</b> 04/03/24		The Changing Economic World – Global development	Urban Issues and Challenges – City in a HIC	<ol style="list-style-type: none"> <li>1. Explain why creating green space is important for sustainable urban living. Use Figure 17 and your own understanding. [4 marks]</li> <li>2. Assess the importance of managing transport as part of urban sustainability [6 marks]</li> <li>3. To what extent has urban change created social and economic opportunities in a UK city you have studied? [9 marks +3 SPaG]</li> </ol>
<b>10</b> 11/03/24		The Changing Economic World LIC/NEE	Changing Economic World – Global development	<ol style="list-style-type: none"> <li>1. Outline how uneven development can cause international migration. [3 marks]</li> <li>2. Explain how physical and economic factors have caused uneven development [4 marks]</li> <li>3. 'Japan is in stage 5 of the Demographic Transition Model (DTM) and is a highly developed country.' Explain this statement. Use Figure 18 and your own understanding. [3 marks]</li> </ol>
<b>11</b> 18/03/24		The Changing Economic World The UK	Changing Economic World LIC/NEE	<ol style="list-style-type: none"> <li>1. Using Figure 19 and your own understanding, suggest how the growth of tourism in a LIC or NEE might help to reduce the development gap. [4 marks]</li> <li>2. Using a case study of a LIC or NEE country, explain the link between Transnational Corporations (TNCs) and industrial development in the country. [6 marks]</li> <li>3. Using a case study of a LIC/NEE, evaluate the effects of economic development on the population's quality of life. [9 marks]</li> </ol>
<b>12</b> 25/03/24		Resource Management Changing Demand in the UK	Changing Economic World The UK	<ol style="list-style-type: none"> <li>1. Suggest how the UK is moving towards a post-industrial economy. Use Figure 20 and your own understanding. [6 marks]</li> <li>2. Evaluate the success or likely success of one or more strategies to resolve regional differences in the UK. [9 marks]</li> <li>3. Assess the importance of transport improvements to the UK economy. [9 marks]</li> </ol>

# The Final Countdown – GCSE Geography

www.internetgeography.net/tfc

Paper 1 – 17/05/24 | Paper 2 – 05/06/24 | Paper 3 – 14/06/24

Week	Visit	Revise	Quiz	Exam Question(s)
<b>13</b> 22/04/24		Resource Management - Water	Resource Management Changing Demand in the UK	<ol style="list-style-type: none"> <li>Using Figure 21 and your own understanding, discuss the issues arising from the UK's changing energy mix. [6 marks]</li> <li>Discuss the challenges of managing water quality and pollution in the UK. Use Figure 22 and your own understanding. [6 marks]</li> <li>'Growing concern in the UK about the carbon footprint of food creates both opportunities and challenges.' Use evidence from Figure 23a and Figure 23b to explain this statement. [6 marks]</li> </ol>
<b>14</b> 29/04/24		Numerical and statistical skills	Resource Management Water	<ol style="list-style-type: none"> <li>Explain how different strategies can be used to make water supplies more sustainable. [6 marks]</li> <li>'A large scale water transfer scheme can bring both advantages and disadvantages'. Explain this statement using an example you have studied. [6 marks]</li> <li>Suggest how water supplies can be made more sustainable Use Figures 25a and 25b and your own understanding. [6 marks]</li> </ol>
<b>15</b> 06/05/24		<b>Paper 1</b> <ul style="list-style-type: none"> <li>The Challenge of Natural Hazards</li> <li>The Living World</li> <li>Physical Landscapes in the U.K</li> </ul>		<b>Paper 1 will be on 17<sup>th</sup> May p.m</b> <a href="#">Link to past papers</a> 
<b>16</b> 13/05/24		<b>Paper 1</b> <ul style="list-style-type: none"> <li>The Challenge of Natural Hazards</li> <li>The Living World</li> <li>Physical Landscapes in the U.K</li> </ul>		
<b>17</b> 20/05/24	The knowledge organiser on Teams	Familiar fieldwork		<ol style="list-style-type: none"> <li>Assess how effective your presentation technique(s) were in representing the data collected in one of your enquiries (6 marks)</li> <li>For one of your geography enquiries, to what extent were results of this enquiry helpful in reaching a reliable conclusion(s)? (9 marks)</li> <li>For your human geography enquiry, assess the extent to which your presentation techniques help you to reach reliable conclusions. (9 marks)</li> </ol>